



ARMY BURN HALL COLLEGE FOR GIRLS ABBOTTABAD

ENTRANCE- EXAM 2024

CLASS/II

TIME: 1 HR.

SUBJECT: MATH

MAX MARKS: /50

Q. No	1	2	3	4	5	6	Total
Marks	10	10	10	5	5	10	50
Marks Obt							
Examiner Sign							

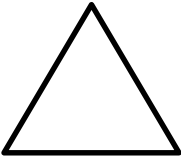


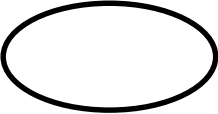

Q1: Fill in the blanks: (10)

- i. $4 \times 6 =$ _____
- ii. $20 + 10 =$ _____
- iii. 5 tens is = _____
- iv. Square has _____ sides.
- v. Circle has _____ corners.
- vi. 21, _____, 23 which number comes between?
- vii. 90 is _____ than 80.
- viii. $34 - 4 =$ _____
- ix. 6 tens 7 ones = _____
- x. Ordinal name for 5th is _____.

Q2: SOLVE : (10)

$\begin{array}{r} T \ O \\ 5 \ 6 \\ + 1 \ 2 \\ \hline \end{array}$	$\begin{array}{r} T \ O \\ 7 \ 1 \\ + 2 \ 4 \\ \hline \end{array}$	$\begin{array}{r} T \ O \\ 7 \ 1 \\ + 2 \ 1 \\ \hline \end{array}$	$\begin{array}{r} T \ O \\ 5 \ 3 \\ - 2 \ 2 \\ \hline \end{array}$	$\begin{array}{r} T \ O \\ 6 \ 8 \\ - 3 \ 4 \\ \hline \end{array}$
--------------------------------------------------------------------	--------------------------------------------------------------------	--------------------------------------------------------------------	--------------------------------------------------------------------	--------------------------------------------------------------------

Q3: Name the shapes: (10)

Q4: The price of story book is Rs.50 and the price of colouring book is RS.45. Sara bought both books. How much she has spent altogether? (05)

T O

Cost of story book is = _____
 Cost of colouring book is = _____
 Amount spent altogether = _____

Q5: There are 38 students in a class. If 20 are girls then how many boys are there? (05)

T O

Total Students = _____
 Number of girls = _____
 Number of boys = _____

Q6: Write in words: (10)

34	
29	
44	
56	
62	